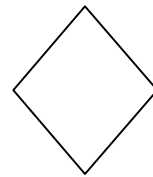
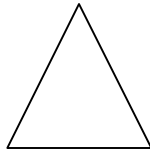
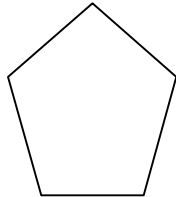
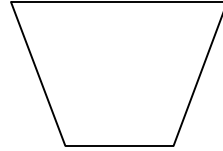
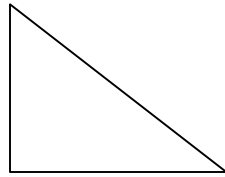
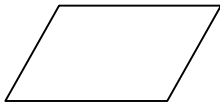


Grade 3  
Unit 12

Some of the shapes below are quadrilaterals.



A. Circle all the quadrilaterals.

B. Write a sentence that explains what a quadrilateral is.